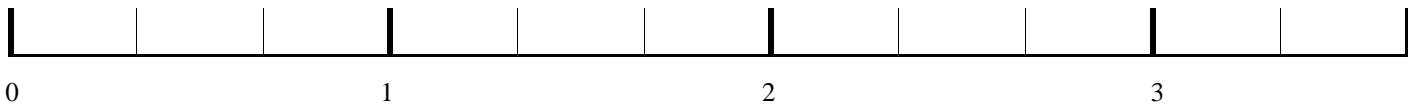


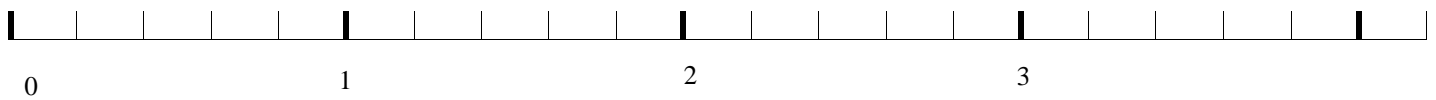
Tu places les points :

$$\frac{2}{3} \quad \frac{4}{3} \quad \frac{9}{3}$$



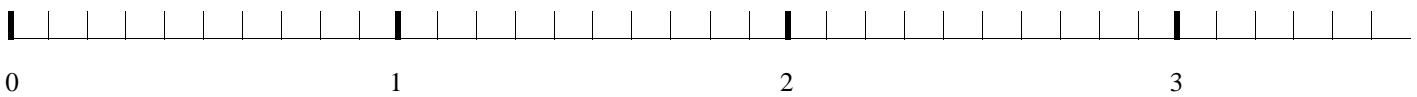
Tu places les points :

$$\frac{4}{5} \quad \frac{8}{5} \quad \frac{23}{10} \quad \frac{20}{5}$$

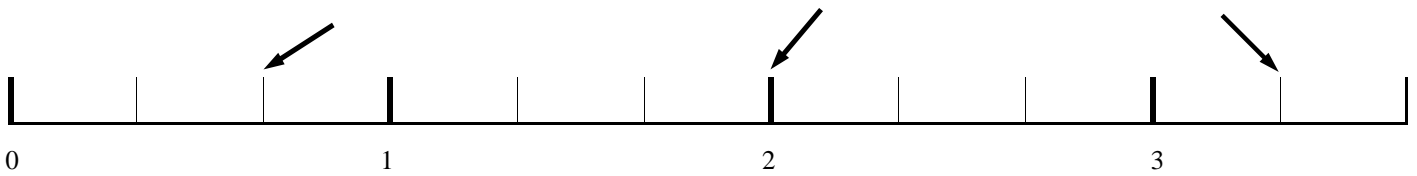


Tu places les points :

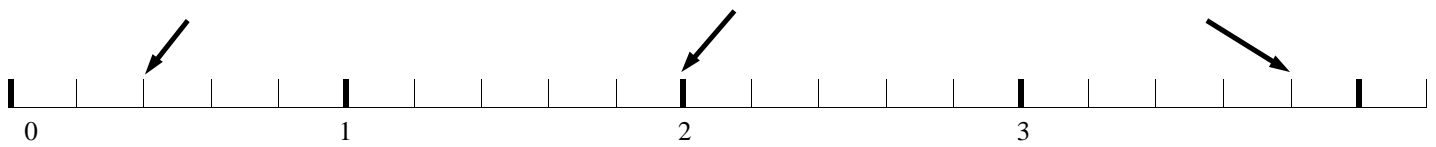
$$\frac{6}{10} \quad \frac{14}{10} \quad \frac{31}{10}$$



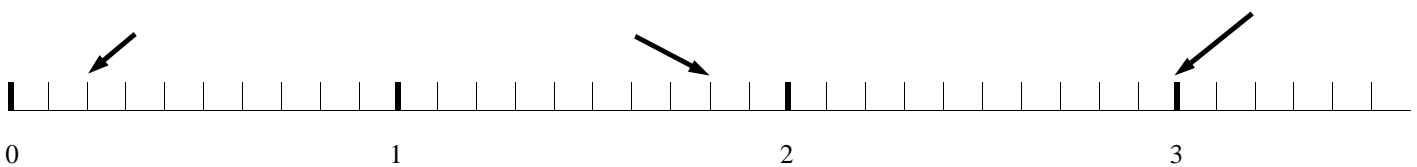
Tu donnes une écriture (plusieurs solutions possibles)



Tu donnes une écriture (plusieurs solutions possibles)

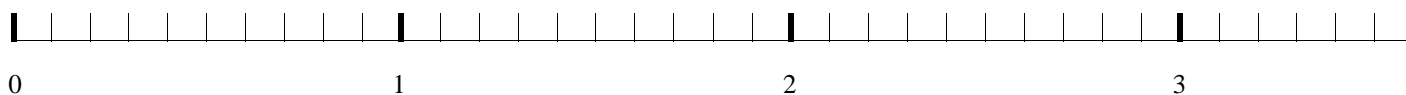
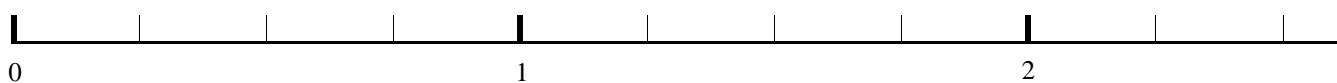
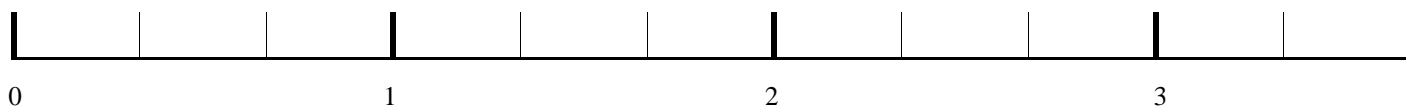


Tu donnes une écriture (plusieurs solutions possibles)



Tu trouves les distances :

- entre $\frac{5}{4}$ et $\frac{9}{4}$
- entre 2 et $\frac{26}{10}$
- entre $\frac{2}{3}$ et 2
- entre $\frac{4}{5}$ et $\frac{18}{10}$

**Tu trouves les distances :**

- entre $\frac{5}{3}$ et $\frac{9}{3}$
- entre 1 et $\frac{22}{10}$
- entre $\frac{4}{3}$ et 3
- entre $\frac{3}{5}$ et $\frac{11}{10}$