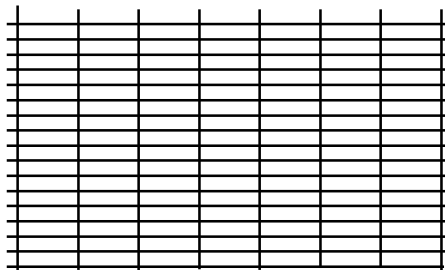


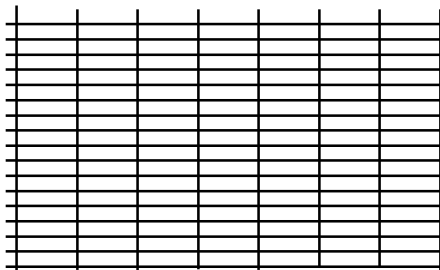
je calcule :
 $34 - 9 = \dots$

je fais la preuve




je calcule :
 $42 - 8 = \dots$

je fais la preuve



je calcule :
 $63 - 5 = \dots$

je fais la preuve



je calcule :
 $85 - 7 = \dots$

je fais la preuve

