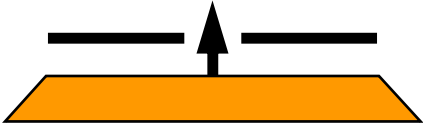


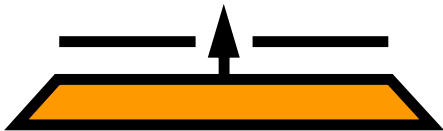
$$20 + \dots = 30$$



$$20 = \dots + 12$$



$$\dots + 42 = 50$$



$$40 = \dots + 32$$



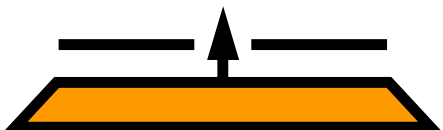
$$20 = 9 + \dots$$



$$90 = 40 + \dots$$



$$20 + \dots = 27$$



$$30 + \dots = 42$$

